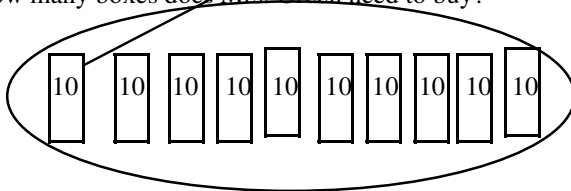
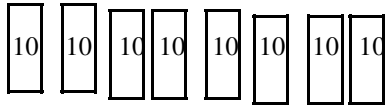


Mrs. Green is buying pencils. She needs 180 pencils.  
Pencils come in boxes of 10.  
How many boxes does Mrs. Green need to buy?



$10 + 10 + 10 + 10 + 10 + 10 + 10 + 10 + 10 + 10 = 100$   
OR  
 $10 \times 10 = 100$                       10 Boxes

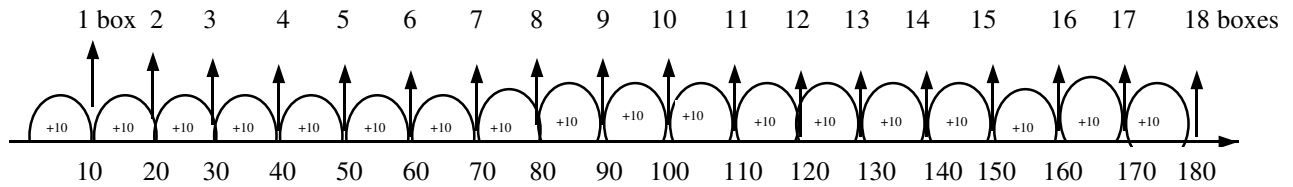


$10 + 10 + 10 + 10 + 10 + 10 + 10 + 10 = 80$   
OR  
 $8 \times 10 = 80$                       8 Boxes

$100 + 80 = 180$   
10 boxes + 8 boxes = 18 boxes

•• Mrs. Green needs to buy 18 boxes

OR



•• Mrs. Green needs to buy 18 boxes.

Mrs. Green is buying pencils. She needs 180 pencils.  
Pencils come in boxes of 10.  
How many boxes does Mrs. Green need to buy?

OR

$18 \times 10 = 180$

•• Mrs. Green needs to buy 18 boxes.