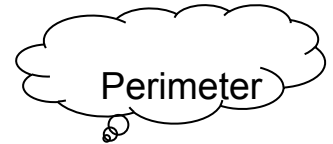


Homework for the Week of March 25th

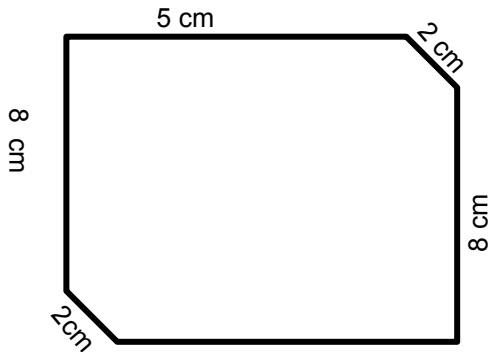
1. Read nightly
2. Visit RAZ Kids and Zorbits
3. Complete the tasks below



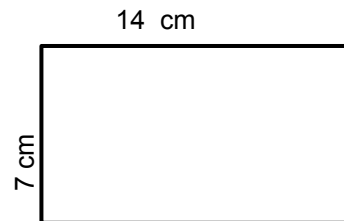
Number of Sides

**Math**

Find the perimeter of the following shapes. It is NOT to scale. So use measurements on sides to figure out missing sides. Remember to include the units of measure in your final P=!



P = \_\_\_\_ + \_\_\_\_ + 5 cm + \_\_\_\_ + \_\_\_\_



P=

**Literacy**

Which word describes the puppy in the following sentence?

On a hot summer day, I threw the new plastic bone to my playful puppy.

- ☐ hot
- ☐ new
- ☐ plastic
- ☐ playful

In the sentence "I'd like to go outside to play," the word "I'd" means

- ☐ I did.
- ☐ I could.
- ☐ I would.
- ☐ I should.

On the back of this page or in your literacy folder on Google Drive use the picture to write **ONLY** the lead for a narrative.

Think about:

Question lead

Picture this lead

Dialogue lead

