

Comparing Numbers

Which number is larger 341 or 314? Show how you know.

Use a Place Value Chart (I begin to look at hundreds, then tens, then ones)

Hundreds	Tens	Ones
3	4	1
3	1	4

Both have three hundred, so far they are the same

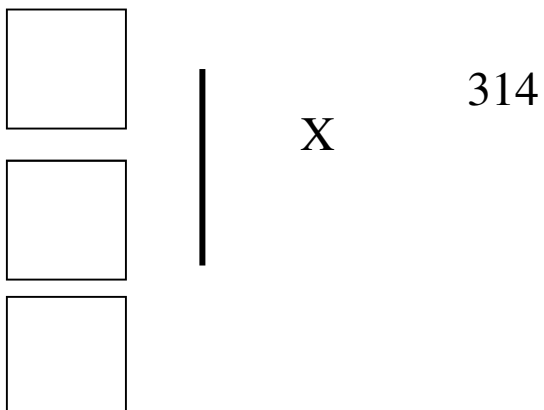
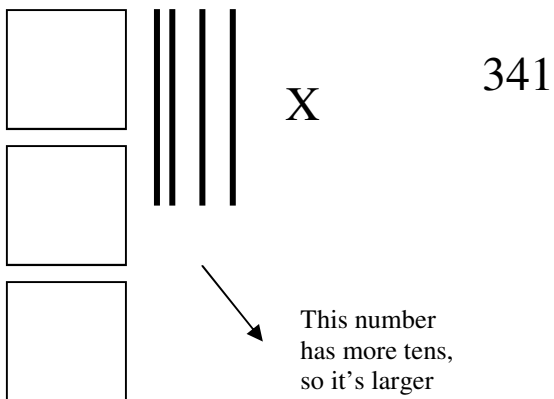
341, has 4 tens
314, has 1 ten

341 is 3 tens larger, so it's the largest

(I don't have to go any further since there is already a difference)

341 is larger than 314

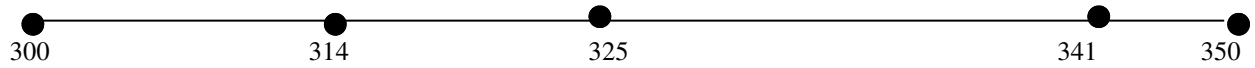
Use Base Ten Blocks



341 is larger than 314

Use a numberline

The difficult part here is for the students to come up with the beginning and ending number of the numberline (anchor numbers).



●
● ● 341 is larger than 314